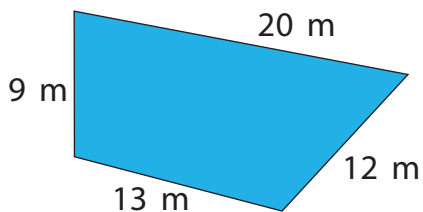
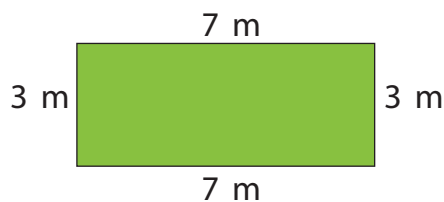


Omkretsen är summan av sidornas längder.



$$20 \text{ m} + 12 \text{ m} + 13 \text{ m} + 9 \text{ m} = 54 \text{ m}$$

Omkretsen är 54 meter.




$$\begin{aligned} 2 \cdot 7 \text{ m} + 2 \cdot 3 \text{ m} &= \\ = 14 \text{ m} + 6 \text{ m} &= 20 \text{ m} \end{aligned}$$

Omkretsen är 20 meter.

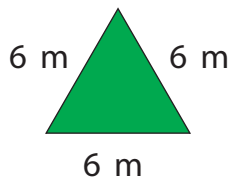
1. Räkna ut figurens omkrets.



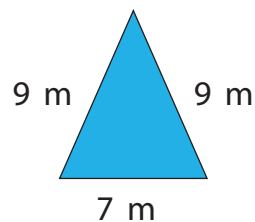
= _____



= _____



= _____



= _____